


Actividades  
de  
Infantil y Primaria


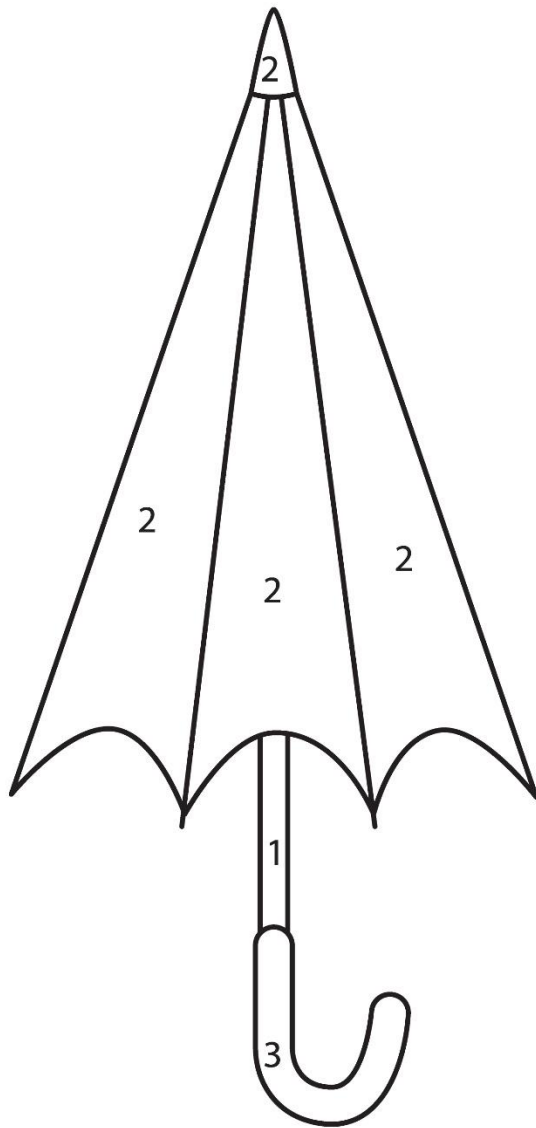



# CUADERNO MATEMÁTICO DE OTOÑO

Para Infantil






Colorea según el código de números:



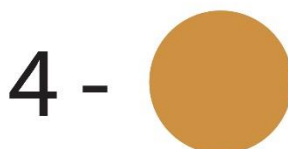






Colorea según el código  
de números:









Colorea según el código de números:



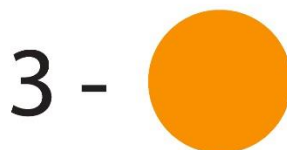
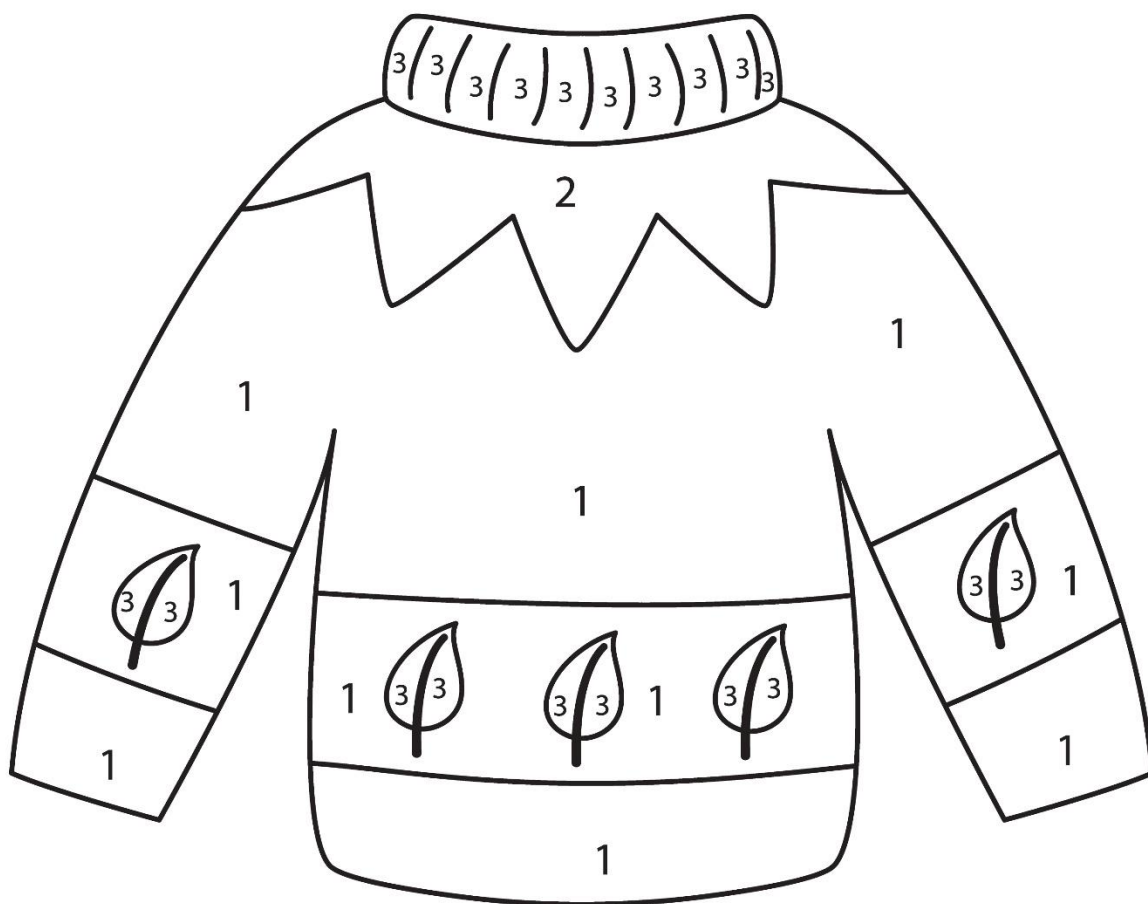


Colorea según el código  
de números:






Colorea según el código de números:




Cuenta, colorea el gráfico e indica cuantos hay de cada uno.



10				
9				
8				
7				
6				
5				
4				
3				
2				
1				



Cuenta, colorea el gráfico e indica cuantos hay de cada uno.




10				
9				
8				
7				
6				
5				
4				
3				
2				
1				








Cuenta, colorea el gráfico e indica cuantos hay de cada uno.



10				
9				
8				
7				
6				
5				
4				
3				
2				
1				



Cuenta, colorea el gráfico e indica cuantos hay de cada uno.



10				
9				
8				
7				
6				
5				
4				
3				
2				
1				



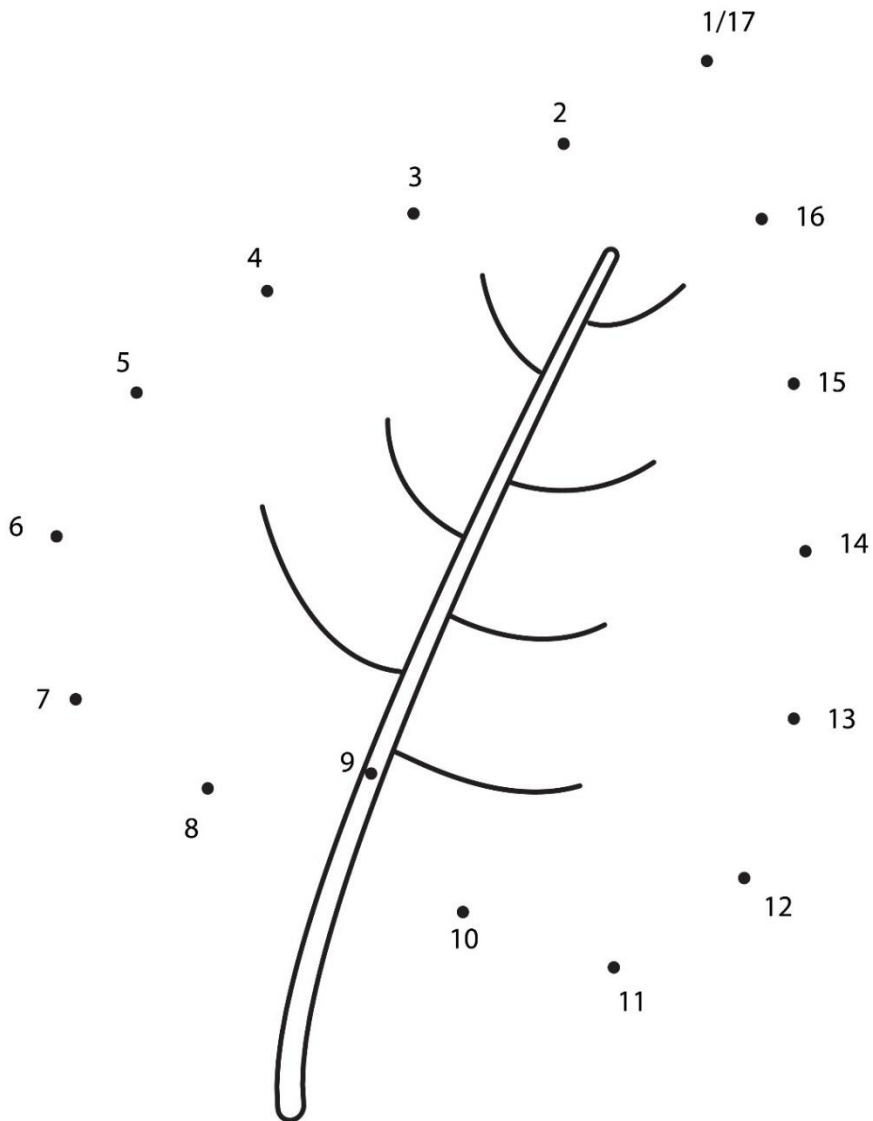





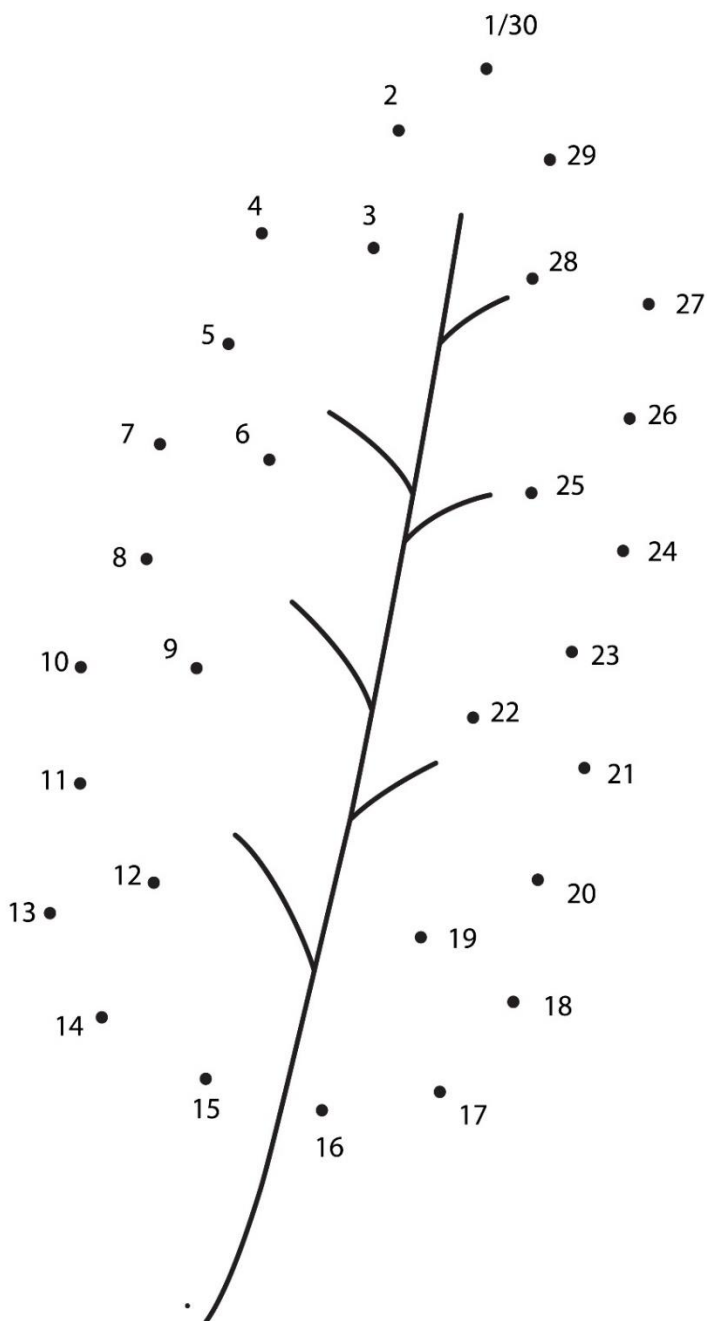






# Une los números y colorea



# Une los números y colorea



Une, como en el ejemplo:



6

8

5

4



Une, como en el ejemplo:



1



3



5






4



2



Calcula, cuántos hay en total.





Calcula, cuántos hay en total.








Resuelve las siguientes sumas:

 = **1**

 = **2**

 = **3**

 = **4**



+



=




+



=



+



=



+



=



Resuelve las siguientes sumas:



= 1



= 2



= 3



= 4



+



=



+



=



+



=









+







=



Resuelve las siguientes sumas:

 = **1**    = **2**    = **3**    = **4**

 +  =

 +  =

 +  =

 +  =

Resuelve las siguientes restas:



$$3 - 1 = 2$$



$$4 - 2 = ?$$



$$5 - 1 = ?$$



$$6 - 3 = ?$$




$$4 - 3 = ?$$



$$5 - 1 = ?$$




Resuelve las siguientes restas:




$$4 - 1 = 3$$



$$5 - 3 = ?$$



$$4 - 2 = ?$$



$$4 - 3 = ?$$



$$5 - 1 = ?$$



$$3 - 2 = ?$$


Resuelve las siguientes restas:




$$5 - 1 = 4$$



$$4 - 1 = ?$$



$$4 - 2 = ?$$



$$3 - 2 = ?$$



$$3 - 1 = ?$$




$$5 - 3 = ?$$

Lleva la ardilla hasta la bellota, siguiendo la serie numérica 1-16.




	1	2	3	0	2	
	↑	4	4	5	6	
4	9	8	6	9	8	7
3	5	7	11	10	6	9
3	4	6	12	10	11	0
1	8	7	13	12	17	19
0	11	2	14	18	19	21
1	13	17	15	16		
12	15	16	17	→		



Lleva la ardilla hasta la bellota, siguiendo la serie numérica 1-16.



		0	1	3	5	4
		↓	4	7	2	3
8	6	1	2	5	1	0
6	5	4	3	11	8	7
7	11	8	11	10	12	11
8	9	9	19	12	17	14
11	10	11	18	17	16	15
13	15	12	15	16		
19	16	13	14	→		






Lleva la ardilla hasta la bellota, siguiendo la serie numérica 1-16.




		1	2	3	7	8
		↑	3	2	9	7
4	2	5	4	4	0	1
13	17	6	16	17	9	3
18	12	7	8	9	10	17
7	3	15	14	12	11	16
10	7	16	14	13	12	17
14	13	12	15	17		
12	13	10	16	→		



Lleva la ardilla hasta la bellota, siguiendo la serie numérica 1-16.



	1	4	5	3	6	
	2	9	8	7	8	
↓	0	1	0	3	8	6
1	2	4	5	4	0	9
4	3	6	19	12	13	14
5	6	7	10	11	16	15
8	11	8	9	12	↓	17
9	12	10	11	15		
16	13	14	17	18		



# ¡Vamos a sumar!

$$\begin{array}{r} 9 \\ + 9 \\ \hline \end{array}$$

$$\begin{array}{r} 8 \\ + 8 \\ \hline \end{array}$$

$$\begin{array}{r} 7 \\ + 7 \\ \hline \end{array}$$



$$\begin{array}{r} 8 \\ + 6 \\ \hline \end{array}$$

$$\begin{array}{r} 2 \\ + 7 \\ \hline \end{array}$$

$$\begin{array}{r} 4 \\ + 6 \\ \hline \end{array}$$

$$\begin{array}{r} 7 \\ + 3 \\ \hline \end{array}$$

$$\begin{array}{r} 10 \\ + 2 \\ \hline \end{array}$$

$$\begin{array}{r} 10 \\ + 4 \\ \hline \end{array}$$

$$\begin{array}{r} 10 \\ + 8 \\ \hline \end{array}$$

$$\begin{array}{r} 10 \\ + 1 \\ \hline \end{array}$$

$$\begin{array}{r} 11 \\ + 4 \\ \hline \end{array}$$

$$\begin{array}{r} 10 \\ + 9 \\ \hline \end{array}$$

$$\begin{array}{r} 9 \\ + 8 \\ \hline \end{array}$$


$$\begin{array}{r} 12 \\ + 7 \\ \hline \end{array}$$

# ¡Vamos a restar!

$$\begin{array}{r} 9 \\ - 8 \\ \hline \end{array}$$

$$\begin{array}{r} 10 \\ - 4 \\ \hline \end{array}$$

$$\begin{array}{r} 11 \\ - 2 \\ \hline \end{array}$$



$$\begin{array}{r} 13 \\ - 3 \\ \hline \end{array}$$

$$\begin{array}{r} 14 \\ - 5 \\ \hline \end{array}$$

$$\begin{array}{r} 10 \\ - 6 \\ \hline \end{array}$$

$$\begin{array}{r} 19 \\ - 2 \\ \hline \end{array}$$

$$\begin{array}{r} 14 \\ - 2 \\ \hline \end{array}$$

$$\begin{array}{r} 18 \\ - 9 \\ \hline \end{array}$$

$$\begin{array}{r} 24 \\ - 7 \\ \hline \end{array}$$

$$\begin{array}{r} 20 \\ - 0 \\ \hline \end{array}$$

$$\begin{array}{r} 20 \\ - 2 \\ \hline \end{array}$$

$$\begin{array}{r} 21 \\ - 6 \\ \hline \end{array}$$

$$\begin{array}{r} 25 \\ - 6 \\ \hline \end{array}$$

$$\begin{array}{r} 21 \\ - 4 \\ \hline \end{array}$$

# ¡Vamos a sumar!

$$\begin{array}{r} 12 \\ + 7 \\ \hline \end{array}$$

$$\begin{array}{r} 10 \\ + 4 \\ \hline \end{array}$$

$$\begin{array}{r} 13 \\ + 3 \\ \hline \end{array}$$



$$\begin{array}{r} 16 \\ + 3 \\ \hline \end{array}$$

$$\begin{array}{r} 10 \\ + 2 \\ \hline \end{array}$$

$$\begin{array}{r} 20 \\ + 3 \\ \hline \end{array}$$

$$\begin{array}{r} 13 \\ + 6 \\ \hline \end{array}$$

$$\begin{array}{r} 11 \\ + 3 \\ \hline \end{array}$$

$$\begin{array}{r} 13 \\ + 4 \\ \hline \end{array}$$

$$\begin{array}{r} 16 \\ + 5 \\ \hline \end{array}$$

$$\begin{array}{r} 19 \\ + 3 \\ \hline \end{array}$$

$$\begin{array}{r} 11 \\ + 2 \\ \hline \end{array}$$

$$\begin{array}{r} 16 \\ + 0 \\ \hline \end{array}$$

$$\begin{array}{r} 17 \\ + 9 \\ \hline \end{array}$$

$$\begin{array}{r} 18 \\ + 8 \\ \hline \end{array}$$

# ¡Vamos a restar!

$$\begin{array}{r} 10 \\ - 5 \\ \hline \end{array}$$

$$\begin{array}{r} 12 \\ - 8 \\ \hline \end{array}$$

$$\begin{array}{r} 13 \\ - 1 \\ \hline \end{array}$$



$$\begin{array}{r} 11 \\ - 3 \\ \hline \end{array}$$

$$\begin{array}{r} 14 \\ - 8 \\ \hline \end{array}$$

$$\begin{array}{r} 10 \\ - 2 \\ \hline \end{array}$$

$$\begin{array}{r} 15 \\ - 5 \\ \hline \end{array}$$

$$\begin{array}{r} 19 \\ - 1 \\ \hline \end{array}$$

$$\begin{array}{r} 22 \\ - 10 \\ \hline \end{array}$$

$$\begin{array}{r} 18 \\ - 9 \\ \hline \end{array}$$

$$\begin{array}{r} 16 \\ - 13 \\ \hline \end{array}$$

$$\begin{array}{r} 22 \\ - 4 \\ \hline \end{array}$$

$$\begin{array}{r} 25 \\ - 4 \\ \hline \end{array}$$

$$\begin{array}{r} 20 \\ - 0 \\ \hline \end{array}$$

$$\begin{array}{r} 19 \\ - 9 \\ \hline \end{array}$$

# ¡Vamos a sumar!

$$\begin{array}{r} 5 \\ + 1 \\ \hline \end{array}$$

$$\begin{array}{r} 1 \\ + 9 \\ \hline \end{array}$$

$$\begin{array}{r} 8 \\ + 3 \\ \hline \end{array}$$



$$\begin{array}{r} 8 \\ + 9 \\ \hline \end{array}$$

$$\begin{array}{r} 3 \\ + 9 \\ \hline \end{array}$$

$$\begin{array}{r} 2 \\ + 5 \\ \hline \end{array}$$

$$\begin{array}{r} 9 \\ + 6 \\ \hline \end{array}$$

$$\begin{array}{r} 5 \\ + 5 \\ \hline \end{array}$$

$$\begin{array}{r} 6 \\ + 6 \\ \hline \end{array}$$

$$\begin{array}{r} 10 \\ + 3 \\ \hline \end{array}$$

$$\begin{array}{r} 6 \\ + 7 \\ \hline \end{array}$$







$$\begin{array}{r} 4 \\ + 7 \\ \hline \end{array}$$




$$\begin{array}{r} 8 \\ + 7 \\ \hline \end{array}$$

$$\begin{array}{r} 12 \\ + 9 \\ \hline \end{array}$$

$$\begin{array}{r} 15 \\ + 6 \\ \hline \end{array}$$

Resuelve el siguiente sudoku:


		
		
		

		
---	---	--












Resuelve el siguiente sudoku:



Resuelve el siguiente sudoku:



Resuelve el siguiente sudoku:

		
---	---	--



# Créditos y normas de uso



Actividades  
de  
Infantil y Primaria



Agradezco la confianza e interés en estas actividades que fueron creadas con mucho cariño y dedicación. Espero sinceramente que estos materiales les ayuden y que impacten en el aprendizaje de los alumnos y alumnas jugando, creando e innovando.

Todos los derechos reservados por [Actividades de Infantil y Primaria](#). Queda prohibido distribuir, reproducir o vender este material por cualquier medio ya sea electrónicamente o de manera impresa, así como reclamarlo como propio e intentar modificar o quitar avisos de copyright, logos o marcas de agua ya que se encuentra protegido por los derechos de autor. El incumplimiento es una violación a la Ley de los Derechos de Autor y tendrá consecuencias legales.

©opyright

SÍGUENOS



@adeiyp



Actividades de Infantil y  
Primaria

Suscríbete en <https://www.actividadesdeinfantilyprimaria.com/>

Créditos

