

Resuelve las siguientes sumas y restas



$32 + 10 = \square$

$64 - 20 = \square$

$55 + 40 = \square$

$82 - 60 = \square$

$71 + 20 = \square$

$46 - 40 = \square$

$47 + 40 = \square$

$68 - 10 = \square$


$16 + 80 = \square$

$75 - 30 = \square$

$23 + 60 = \square$

$99 - 50 = \square$





Resuelve las siguientes sumas y restas



$44 + 20 = \square$

$85 - 70 = \square$

$63 + 30 = \square$

$53 - 10 = \square$

$17 + 50 = \square$

$69 - 30 = \square$

$22 + 80 = \square$

$71 - 50 = \square$


$31 + 40 = \square$

$92 - 80 = \square$

$94 + 10 = \square$

$47 - 20 = \square$





Resuelve las siguientes sumas y restas



$62 + 20 = \square$

$97 - 80 = \square$

$45 + 50 = \square$

$36 - 10 = \square$

$73 + 30 = \square$

$48 - 30 = \square$

$11 + 70 = \square$

$66 - 40 = \square$


$29 + 40 = \square$

$19 - 10 = \square$

$56 + 50 = \square$

$73 - 40 = \square$





Resuelve las siguientes sumas y restas



$12 + 80 = \square$

$100 - 50 = \square$

$51 + 30 = \square$

$68 - 50 = \square$

$79 + 20 = \square$

$46 - 10 = \square$

$34 + 50 = \square$

$95 - 40 = \square$

$85 + 10 = \square$

$37 - 20 = \square$

$93 + 40 = \square$

$86 - 60 = \square$

