


Completa los cuadros con el número correspondiente:

- 10	27	+ 10
17		37

- 10	54	+ 10



- 10	62	+ 10


- 10	19	+ 10

- 10	40	+ 10

- 10	81	+ 10

- 10	105	+ 10

- 10	73	+ 10




- 10	36	+ 10

- 10	55	+ 10

Completa los cuadros con el número correspondiente:

- 10	16	+ 10

- 10	59	+ 10



- 10	82	+ 10


- 10	140	+ 10

- 10	71	+ 10

- 10	93	+ 10

- 10	119	+ 10

- 10	24	+ 10




- 10	188	+ 10

- 10	204	+ 10

Completa los cuadros con el número correspondiente:

- 10	135	+ 10

- 10	172	+ 10



- 10	628	+ 10


- 10	413	+ 10

- 10	381	+ 10

- 10	196	+ 10

- 10	827	+ 10

- 10	141	+ 10



- 10	708	+ 10

- 10	993	+ 10