


Cuenta y suma:



$$\boxed{4} + \boxed{2} = \boxed{6}$$



$$\boxed{} + \boxed{} = \boxed{}$$




$$\boxed{} + \boxed{} = \boxed{}$$

Cuenta y suma:



$$\square + \square = \square$$



$$\square + \square = \square$$



$$\square + \square = \square$$


Cuenta y suma:



$$\square + \square = \square$$



$$\square + \square = \square$$



$$\square + \square = \square$$