



Completa la secuencia numérica:



1

4

7



3


5

8






Completa la secuencia numérica:



2

6

10




1

9





Completa la secuencia numérica:



2

8



5

