

Resuelve las siguientes operaciones:

$$\begin{array}{r} 13 \\ + 26 \\ \hline \end{array}$$

$$\begin{array}{r} 37 \\ + 15 \\ \hline \end{array}$$

$$\begin{array}{r} 28 \\ + 14 \\ \hline \end{array}$$

$$\begin{array}{r} 51 \\ + 33 \\ \hline \end{array}$$

$$\begin{array}{r} 46 \\ + 44 \\ \hline \end{array}$$

$$\begin{array}{r} 15 \\ + 15 \\ \hline \end{array}$$

$$\begin{array}{r} 27 \\ + 39 \\ \hline \end{array}$$

$$\begin{array}{r} 83 \\ + 23 \\ \hline \end{array}$$


$$\begin{array}{r} 34 \\ + 19 \\ \hline \end{array}$$

$$\begin{array}{r} 55 \\ + 61 \\ \hline \end{array}$$

$$\begin{array}{r} 72 \\ + 19 \\ \hline \end{array}$$

$$\begin{array}{r} 96 \\ + 25 \\ \hline \end{array}$$





Resuelve las siguientes operaciones:

$$\begin{array}{r} 19 \\ + 41 \\ \hline \end{array}$$

$$\begin{array}{r} 85 \\ + 34 \\ \hline \end{array}$$

$$\begin{array}{r} 63 \\ + 27 \\ \hline \end{array}$$

$$\begin{array}{r} 49 \\ + 12 \\ \hline \end{array}$$

$$\begin{array}{r} 75 \\ + 23 \\ \hline \end{array}$$

$$\begin{array}{r} 31 \\ + 58 \\ \hline \end{array}$$

$$\begin{array}{r} 94 \\ + 22 \\ \hline \end{array}$$

$$\begin{array}{r} 28 \\ + 86 \\ \hline \end{array}$$

$$\begin{array}{r} 77 \\ + 71 \\ \hline \end{array}$$


$$\begin{array}{r} 64 \\ + 93 \\ \hline \end{array}$$

$$\begin{array}{r} 29 \\ + 35 \\ \hline \end{array}$$

$$\begin{array}{r} 58 \\ + 82 \\ \hline \end{array}$$



Resuelve las siguientes operaciones:



$$\begin{array}{r} 63 \\ - 12 \\ \hline \end{array}$$

$$\begin{array}{r} 29 \\ - 15 \\ \hline \end{array}$$

$$\begin{array}{r} 74 \\ - 56 \\ \hline \end{array}$$

$$\begin{array}{r} 36 \\ - 8 \\ \hline \end{array}$$

$$\begin{array}{r} 97 \\ - 64 \\ \hline \end{array}$$

$$\begin{array}{r} 48 \\ - 36 \\ \hline \end{array}$$

$$\begin{array}{r} 73 \\ - 11 \\ \hline \end{array}$$

$$\begin{array}{r} 81 \\ - 27 \\ \hline \end{array}$$

$$\begin{array}{r} 54 \\ - 39 \\ \hline \end{array}$$


$$\begin{array}{r} 67 \\ - 25 \\ \hline \end{array}$$

$$\begin{array}{r} 38 \\ - 23 \\ \hline \end{array}$$

$$\begin{array}{r} 76 \\ - 14 \\ \hline \end{array}$$



Resuelve las siguientes operaciones:



$$\begin{array}{r} 47 \\ - 25 \\ \hline \end{array}$$

$$\begin{array}{r} 99 \\ - 36 \\ \hline \end{array}$$

$$\begin{array}{r} 70 \\ - 48 \\ \hline \end{array}$$

$$\begin{array}{r} 54 \\ - 18 \\ \hline \end{array}$$

$$\begin{array}{r} 27 \\ - 19 \\ \hline \end{array}$$

$$\begin{array}{r} 82 \\ - 64 \\ \hline \end{array}$$

$$\begin{array}{r} 35 \\ - 19 \\ \hline \end{array}$$

$$\begin{array}{r} 94 \\ - 65 \\ \hline \end{array}$$

$$\begin{array}{r} 60 \\ - 27 \\ \hline \end{array}$$

$$\begin{array}{r} 41 \\ - 29 \\ \hline \end{array}$$

$$\begin{array}{r} 78 \\ - 37 \\ \hline \end{array}$$

$$\begin{array}{r} 83 \\ - 55 \\ \hline \end{array}$$

